



12 is an abundant number.
12 is a pentagonal number.

12


12 is an abundant number.
12 is a pentagonal number.

12


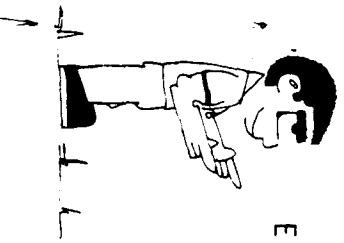
YOU MUST START WITH THE G ON TOP AND MOVE DOWN THE DIAGRAM TO THE C AT THE BOTTOM. FROM ANY GIVEN LETTER, YOU CAN ONLY MOVE TO ONE OF THE LETTERS DIRECTLY BELOW IT ON THE LEFT OR RIGHT.



FOLLOWING THESE RULES, HOW MANY DIFFERENT WAYS CAN YOU SPELL GEOMETRIC?



YOU MUST START WITH THE G ON TOP AND MOVE DOWN THE DIAGRAM TO THE C AT THE BOTTOM. FROM ANY GIVEN LETTER, YOU CAN ONLY MOVE TO ONE OF THE LETTERS DIRECTLY BELOW IT ON THE LEFT OR RIGHT.



FOLLOWING THESE RULES, HOW MANY DIFFERENT WAYS CAN YOU SPELL GEOMETRIC?

